

**BAWA-LALVANI PUBLIC SCHOOL, KAPURTHALA  
HOLIDAY'S HOMEWORK (2019-20) GRADE – VI**



STUDENT'S NAME:

DATE:



*Dear students*

*As we have embarked on our journey in this new session, The most awaited time of the year has arrived. Time to relish summer delicacies, Rejuvenate our mind and body, Rethink and recreate our potentials. Life is all about climbing mountains and fording streams. In these longer days and shorter nights when you spend your time with favorite music and best friends, Give space to creativity and honing skills. Ignite the spark of your imagination and spend time purposely, Dreams only become reality when efforts are made for achievement.*

***Some pointers to Remember:***

- ❖ Holiday Homework is a part of subject enrichment and will be assessed on the basis of creativity and efforts of the students.
- ❖ Enhance your speaking skills and vocabulary by conversing in English with your family and friends.
- ❖ Read famous fictions, update you with current events by reading newspaper and listening to the news daily.
- ❖ Schedule your time for activities so that there is no piling up for the last moment.
- ❖ Practice being a change by contributing to the community by sharing your knowledge.
- ❖ Visit an orphanage, old age home or try to impart literacy to at least one person in your surroundings.
- ❖ Holiday Homework will be submitted as per the given schedule  
English & Maths - July 8  
SSt & Science- July 9  
Hindi and Punjabi - July 10
- ❖ Note: Students will attempt English, Hindi, Math and Punjabi work in a single notebook with proper division.

## Some Do's And Don'ts During Summer Vacation

# Do's

Do's Keep yourself hydrated- Drink lots of water

Eat small, light and frequent meals.

Eat lots of vegetables and seasonal fruits.

Discover your creativity through Research work sheets.

# Don'ts

Avoid fast food and artificial sugar added drinks.

Avoid going outdoor at noon.

Do not waste all your time to play video games and/or mobile games

Do not oversleep, and do not let laziness take you over.


### Let us do these errands to make our parents happy this summer:

- ❖ Clean and set up your cupboard at least once in a week.
- ❖ Set up /arrange your book rack on every alternate day.
- ❖ Learn to iron your clothes yourself.
- ❖ Prepare and serve tea to your parents at least five times during vacation.



Note: The Parents are requested to fill the feedback form attached on the last page.

**BAWA-LALVANI PUBLIC SCHOOL, KAPURTHALA  
HOLIDAY'S HOMEWORK (2019-20) GRADE – VI**

SUBJECT	TASK
English	<p><b>A. Make a display card of A4 size :</b></p> <ol style="list-style-type: none"> <li>1. Use an A4 size pastel sheet of green, yellow or light blue colour.</li> <li>2. Paste the picture of any one of the following authors- RabindraNath Tagore, Ruskin Bond, O Henry and William Shakespeare.</li> <li>3. Provide the following information about the author- <ul style="list-style-type: none"> <li>• Place and date of birth</li> <li>• Popular works</li> <li>• Awards received</li> <li>• Laminate the card and present it beautifully.</li> </ul> </li> </ol> <p><b>B. Write a letter to your mother telling her to take you for an outing to Dubai explaining the various sites you wish to visit there.</b></p>
HINDI	1) दिए गए चित्र को देखकर 40-50 शब्दों में वर्णन कीजिए।
	
	<ol style="list-style-type: none"> <li>2) “ मेरा प्यारा भारत ” पर 80-100 शब्दों का अनुच्छेद लिखिए।</li> <li>3) डॉक्टर और रोगी के बीच संवाद लिखें।(10 lines)</li> <li>4)स्वच्छ भारत अभियान के विषय पर पोस्टर बनाएँ।</li> </ol>
PUNJABI	<ol style="list-style-type: none"> <li>1. ਜੰਗਲਾਂ ਦੇ ਕੀ ਲਾਭ ਹਨ? ਇਸ ਬਾਰੇ ਦਸ ਵਾਕ ਲਿਖੋ। ਇਸ ਤੋਂ ਮਿਲਣ ਵਾਲੀਆਂ ਚੀਜ਼ਾਂ ਦੀਆਂ ਤਸਵੀਰਾਂ ਡਰਾਇੰਗ ਸ਼ੀਟ ਉੱਤੇ ਚਿਪਕਾਓ।</li> <li>2. ਪਾਣੀ ਦੀ ਮਹੱਤਤਾ ਦਰਸਾਉਂਦੇ ਕੋਈ ਪੰਜ ਨਾਅਰੇ ਇੱਕ ਡਰਾਇੰਗ ਸ਼ੀਟ ਉੱਤੇ ਲਿਖੋ।</li> <li>3. ਤੁਹਾਡਾ ਛੋਟਾ ਭਰਾ ਜੋ ਸਿਹਤ ਵੱਲੋਂ ਲਾਪਰਵਾਹੀ ਵਰਤਦਾ ਹੈ, ਇੱਕ ਪੱਤਰ ਰਾਹੀਂ ਉਸ ਨੂੰ ਚੰਗੇ ਖਾਣ- ਪੀਣ ਸੰਬੰਧੀ ਪ੍ਰੇਰਨਾ ਦਿਓ।</li> <li>4. ਕਿਸੇ ਇਤਿਹਾਸਿਕ ਸਥਾਨ ਦੀ ਯਾਤਰਾ ਬਾਰੇ 150 ਸ਼ਬਦਾਂ ਵਿੱਚ ਲੇਖ ਲਿਖੋ</li> </ol>

<b>SCIENCE</b>	<p>Students are required to submit the working model. Some of the suggested topics are given below:</p> <ol style="list-style-type: none"> <li>1. Water cycle</li> <li>2. Electric fan</li> <li>3. Magnetic toy car</li> <li>4. Electromagnetic crane</li> <li>5. Electric circuit</li> <li>6. Periscope</li> <li>7. Windmill</li> </ol>
----------------	--

<b>SOCIAL STUDIES</b>	<p>➤ Imagine you visited two different terrains of India and you could acknowledge the diversity present in the country. Draw or paste a map of India marking out the two states designated to your Roll Number and provide detail description of the diversity as follows:</p> <p>ROLL NO. 1 to 5: Jammu and Kashmir and Chhattisgarh          6 to 10: Punjab and Kerala          11 to 15: Gujarat and Assam          16 to 20: Himachal and Karnataka          21 to 25: Andhra Pradesh and Nagaland          26 to 30: West Bengal and Rajasthan</p> <p>The Key Points to be incorporated while working on the activity-</p> <ul style="list-style-type: none"> <li>• Diversity in Food Habits</li> <li>• Diversity in Clothes</li> <li>• Diversity in Climate</li> <li>• Diversity in Language</li> <li>• Diversity in Cultural events</li> </ul> <p>(Use A4 sheet)</p>
-----------------------	---

<b>MATHS</b>	<p style="text-align: center;"><b><u>WORKSHEET</u></b></p> <p>1) Use the given digits without repetition and make the greatest and smallest five digit numbers          (A) 5,2,3,1,0 (B) 0,1,2,3,4,5 (C) 2,4,6,7,0 (D) 2,1,3,9,8 (E) 1,4,7,5,6</p> <p>2) Make the greatest and the smallest 5-digit numbers using any five different digits with condition as given</p> <p>(A) Digit two is always at tens place , greatest number: _____          smallest number: _____</p> <p>(B) Digit six is always at hundreds place, greatest number: _____          smallest number: _____</p> <p>(C) Digit one is always at thousand place, greatest number: _____          smallest number: _____</p> <p>(D) Digit four is always at ones place , greatest number: _____          smallest number: _____</p> <p>(E) Digit nine is always at ones place greatest number: _____          smallest number: _____</p>
--------------	--

3) Insert commas suitably and write the names according to Indian System of Numeration

- (A) 6574833
- (B) 6748837
- (C) 6778593
- (D) 90000333
- (E) 45367829

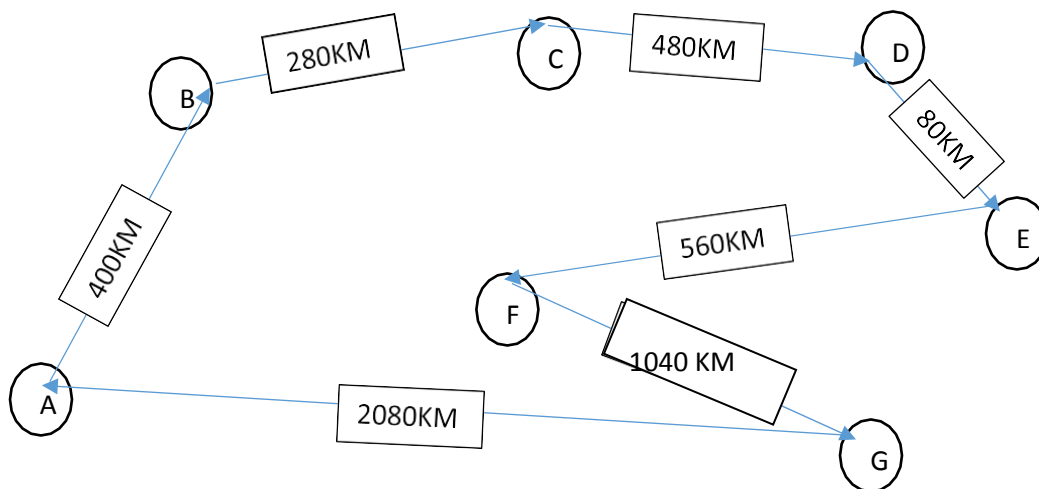
4) Insert commas suitably and write the names according to International System of Numeration

- (A) 7636728
- (B) 9387639
- (C) 84766289
- (D) 748883993
- (E) 87656728

5) A car started its journey and reached different cities with a speed of 40 km/hour. The journey is shown below

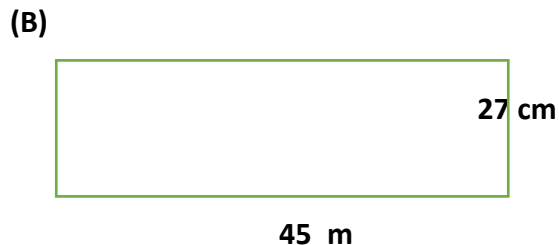
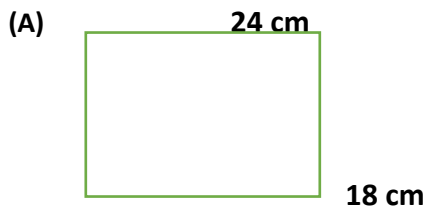
- (A) Find the total distance covered by the car from A to G
- (B) Find the total distance covered by the car, if it starts from A and returns back to A
- (C) Find the time taken by the car to reach

(i) A to D (ii) C to G (iii) E to G (iv) total journey (A to A)



6) Write Roman Numerals up to twenty.

7) Find the perimeter of the following rectangles



8) A fair was held for four days in Bawa- Lalvani Public School. The number of tickets sold at the counter on the first, second, third and final day was respectively 1234, 5643, 234 and 3309. Find the total number of tickets sold on all the four days.

- 9) Virat is a famous cricketer & plays for RCB. He has so far scored 5640 runs in twenty-twenty cricket matches. BCCI said that they will give prize to Virat if he scores 10,000 runs. How many runs does he need to get the prize?
- 10) In general election 2019 in Kapurthala, the successful candidate registered 5, 78,800 votes and his nearest rival secured 4,45,600 votes. By what margin did the successful candidate win the election?
- 11) ACC cement factory Kapurthala sold cement of worth of rupees 23,544,987 and 43, 56,765 in first and second week of April month. How much was the sale the two weeks together? In which week the sale greater and by how much?
- 12) In Saree factory, a machine, on an average, manufactures 25 ambalpuri sarees in a day. How many sarees did it produce in month of February 2019?
- 13) Give a rough estimate (By rounding off to nearest hundreds)
- (A)  $4564+7856+789$
  - (B)  $6758+9830+89$
  - (C)  $78970-67009$
  - (D)  $67450+450$
- 14) Which of the following statements are true (T) and which are false (F)?
- a) Zero is the smallest whole number.
  - b) Zero is the smallest natural number.
  - c) 666 is the predecessor of 667.
  - d) 765 is successor of 764.
  - e) The whole number 13 lies between 11 and 12.
  - f) The successor of a three digit is always a three digit number.
- 15) Make the greatest and smallest 6 digits number using 8, 1, 9, and 2.
- 16) The total mass of 32 packets each of same mass is 50 kg 400gm. What is the mass of each such packet?
- 17) The cost of 45 flats is Rs.205946190. What is the cost of each flat?
- 18) Write each of the following as Hindu-Arabic numeral.
- |           |             |
|-----------|-------------|
| a) XXV    | f) CLXVI    |
| b) XL     | g) CCXXVII  |
| c) LXXXIX | h) CDXXIX   |
| d) XCV    | i) DLXXXVII |
| e) XCIX   | j) MDCLIV   |

## SUGGESTED MOVIES

- School of Rock
- The man who knew Infinity
- Karate Kid

1. Election Museum, Delhi
2. Light and sound show- Akshardham
3. War Memorial, India Gate, Delhi
4. Sulabh International Museum of Toilets, Delhi

## SUGGESTED PLACES TO VISIT

## SUGGESTED PROGRAMS TO WATCH

- Young Sheldon
- Child Genius
- India Super Dancer 3
- National Geographic Sony
- BBC Earth

## Recreational Activities

Create a planter using any old can or plastic bottles and decorate with any recycled materials. Some of the examples are given below.



# Parents Feedback Form

Name: \_\_\_\_\_ Grade: \_\_\_\_\_

Father's Name: \_\_\_\_\_ Mother's Name: \_\_\_\_\_

S.No	Questions	Yes/No
1.	Did your child obey you in summer vacation?	
2.	Did your child iron clothes by himself/herself?	
3.	Did your child waste most of his/her time in watching TV or playing Video game?	
4.	Did your child serve you tea?	
5.	Did your child clean the book rack on every alternate day?	
6.	Did your child help you in cleaning rooms?	
7.	Did your child avoid fast food during vacations?	
8.	Did your child wake up early in the morning during vacations?	
9.	Did your child have done the holiday homework by himself/herself?	
10.	Did your child eat lots of seasonal fruits and vegetables during summer vacation?	
11.	Did your child have set up his/her cupboard?	

Signature of Parent: \_\_\_\_\_

Mobile No: \_\_\_\_\_